

Azaan International School

Grade: III

Worksheet

Subject: Maths

Ch: 8: Shapes, Space, and Pattern

Ch: 10: Time

Name: _____ Sec _____ Roll: _____


I. Fill in the blanks

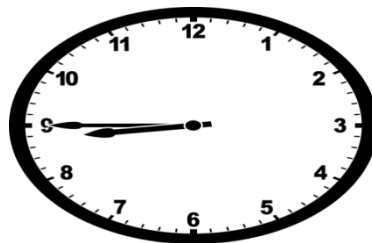
- The flat surface of shape is called it's _____.
- The short-hand or the hour hand tells us what _____ it is.
- The _____ is where two faces meet.
- A sphere has only one _____ surface.
- 7:30 can also be said as _____ past 7.

II. Fill in the table

| Solid shape | Faces | Curved faces |
|-------------|-------|--------------|
| Sphere | | |
| Cylinder | | |
| Cone | | |
| Cuboid | | |
| Cube | | |

III. Write the time in two ways.










IV. Say what views these are:











V. These patterns repeat, draw the next one.



b)



VI. Draw the line of symmetry in the following shapes.

