

AZAAN INTERNATIONAL SCHOOL

Grade - II

Activity Sheet- V

Subject-E.V.S

Name: _____ Class: _____ Sec: _____

LESSON NO: 5 PEOPLE AND PLACES AROUND US.

I. Fill in the blanks with the correct options.

1. An _____ fits and fixes lights, fans .(fire fighter/electrician)
2. A _____ treats us when we fall sick(teacher/ doctor)
3. A _____ teaches us at school (policeman/ teacher)
4. A _____ takes us to school. (driver/ teacher)
5. A _____ makes and repairs furniture.[tailor/ carpenter]
6. A _____ grows food for us to eat. [postman/farmer]

II. Name any four people working at different places and fill the tabular column.

First one is done for you.

PEOPLE	PLACES
Doctor	Hospital

III. Write the numbers to call in an emergency.

1. Police station: _____
2. Ambulance: _____
3. Fire station: _____

IV. Who am I?

1. I carry sick people on wheels. I have a red cross on me, I can jump signals. Who am I? _____.

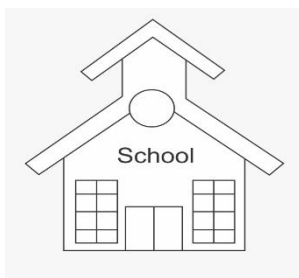

2. I make lovely cakes on birthdays, new year and Christmas. Who am I?
_____.

3. I protect people from thieves and other dangers. Who am I?
_____.

4. I go in a fire engine to put off fire, You can call me in emergency on 101? Who am I? _____.

5. I sell fresh fruits and vegetables, you can see me near your house. Who am I?
_____.

V. Match the following.



POLICEMAN



AZAAN INTERNATIONAL SCHOOL

Grade - II

Activity Sheet- VI

Subject-E.V.S


Name: _____ Class: _____ Sec: _____

LESSON NO: 6. PLANTS – OUR GREEN FRIENDS.

I. Fill in the blanks.

1. A fruit develops from the _____.(leaf /seed)
2. Trees have thick, strong stems called _____. (trunk /stem)
3. _____ have strong woody stem. (herbs / shrubs)
4. Pumpkin is the example of _____. (climbers / creepers)
5. We must _____ plants daily.(water / pluck)

II. Identify the pictures as Creeper, Shrub, Herb, Climber, or Tree.



III. Give examples for the following.

1. Any two creepers.

a. _____ b. _____

2. Any two shrubs.

a. _____ b. _____

3. Any two herbs.

a. _____ b. _____

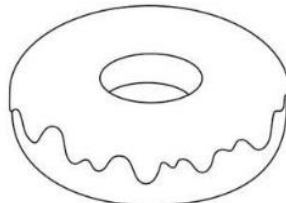
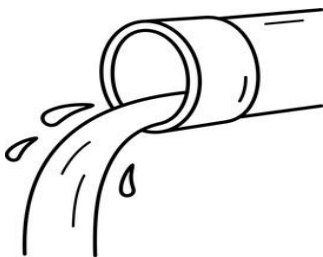



4. Any two climbers.

a. _____ b. _____


5. Any two trees.

a. _____ b. _____

IV. Circle the things a plant needs to survive and grow.



V. Draw, label and colour the parts of a plant.



AZAAN INTERNATIONAL SCHOOL

Grade - II

Activity Sheet: VII

Subject-E.V.S

Name: _____ Class: _____ Sec: _____


LESSON NO: 7: ANIMALS AROUND US

I. Fill in the blanks.

1. The fastest animal on the Earth is the _____.(cheetah / monkey).
2. The place where an animal lives is called its _____(habitat / neighbourhood)
3. _____ eats the flesh of other animals.(Lion / Giraffe)
4. _____ eat both plants and flesh of other animals.(Lion/ Bears)
5. The animals that eat only the flesh of other animals are called _____(meat eaters/ plant eaters)

II. Identify and write how do the following animals move?

hop slither swim fly jump crawl









4.



5.



6.



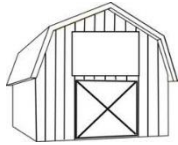
III. Sort out the plant eaters , meat eaters and animals that eat both. write it in the correct column.

Goat	lion	zebra	peacock	bear	wolf
	Crocodile	giraffe	dog		

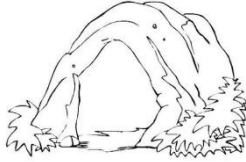
Plant Eater	Meat Eater	Animals that eat both
1.	1.	1.
2.	2.	2.
3.	3.	3.

IV. Match the animals to its shelter.

1. Monkey



2. Horse.



3. Bee.



4. Lion.



5. Bird.

